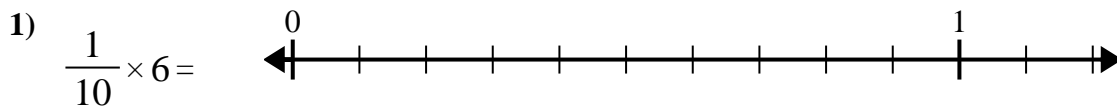


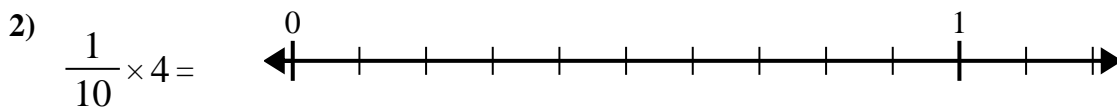


Use the numberline to solve.

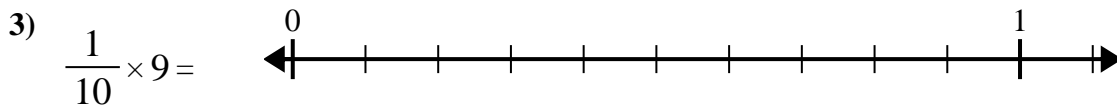
Answers



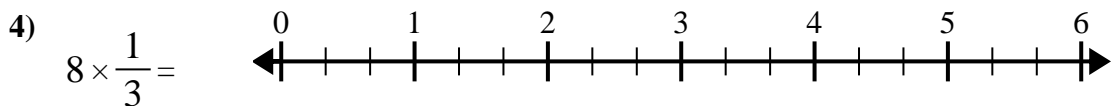
1. _____



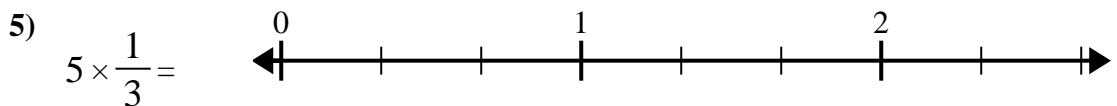
2. _____



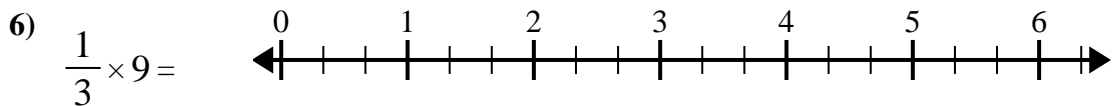
3. _____



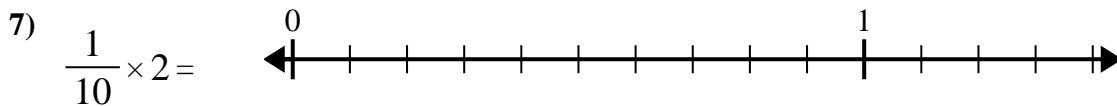
4. _____



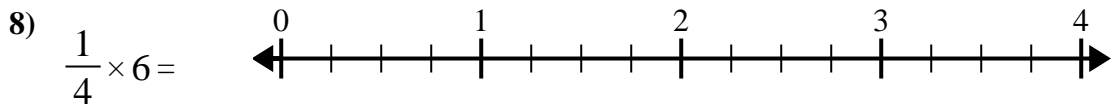
5. _____



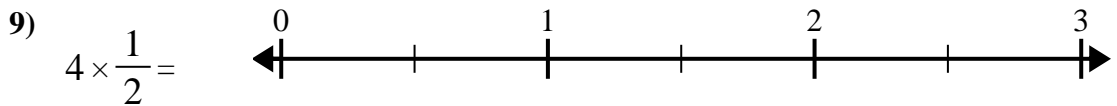
6. _____



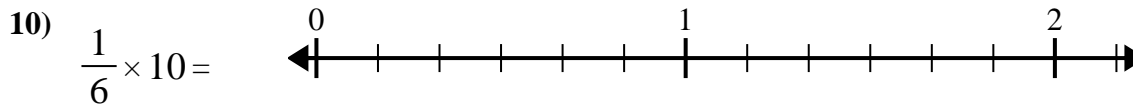
7. _____



8. _____



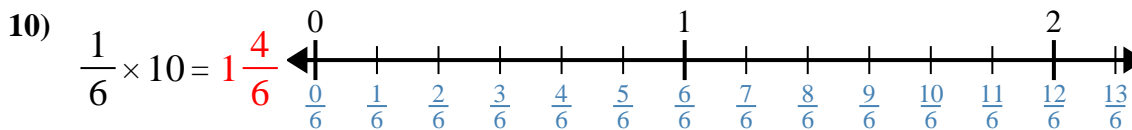
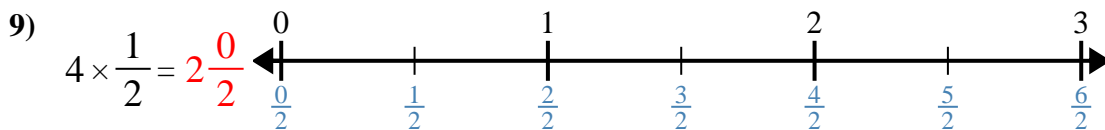
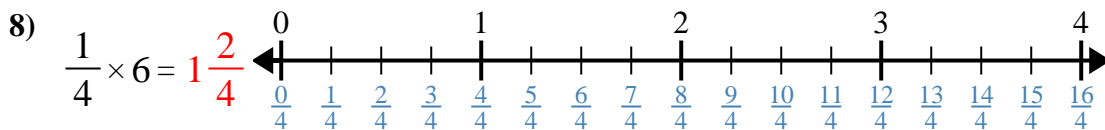
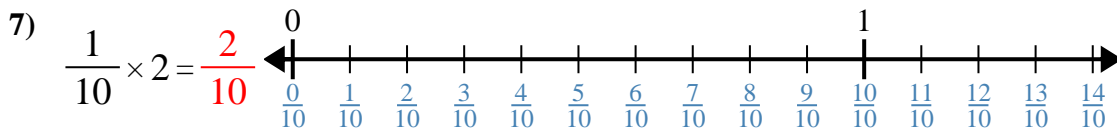
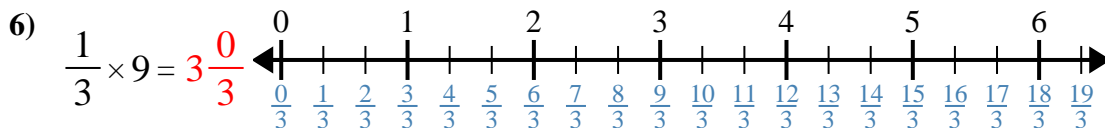
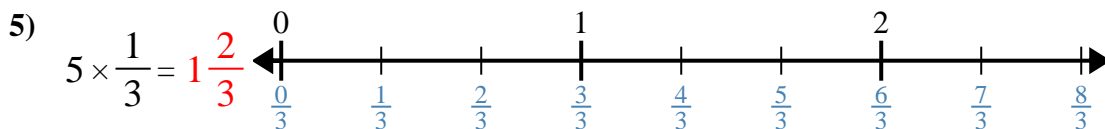
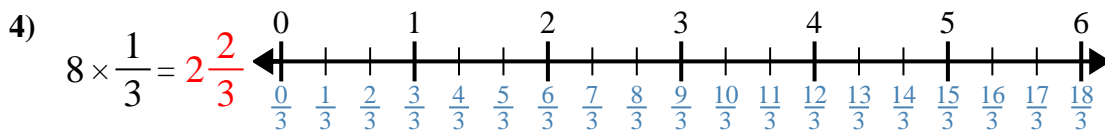
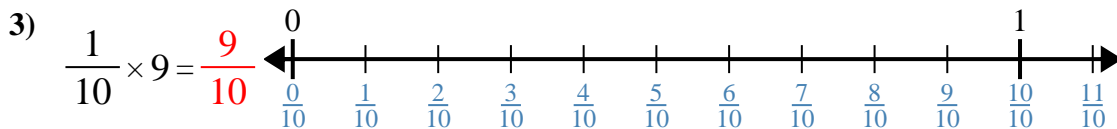
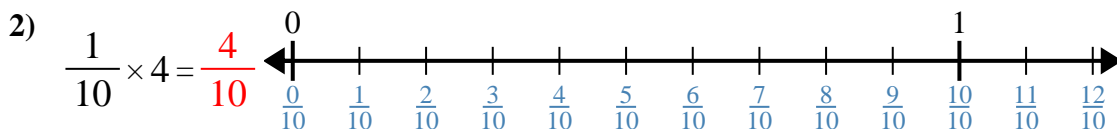
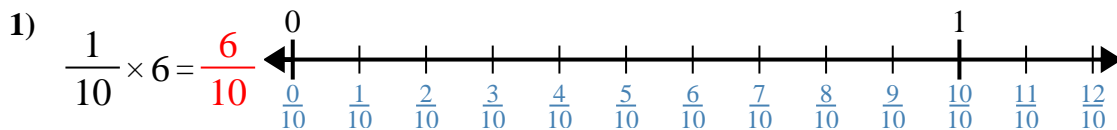
9. _____



10. _____



Use the numberline to solve.



Answers

1. $\frac{6}{10}$

2. $\frac{4}{10}$

3. $\frac{9}{10}$

4. $2\frac{2}{3}$

5. $1\frac{2}{3}$

6. $3\frac{0}{3}$

7. $\frac{2}{10}$

8. $1\frac{2}{4}$

9. $2\frac{0}{2}$

10. $1\frac{4}{6}$



Use the numberline to solve.

$1\frac{4}{6}$

$1\frac{2}{3}$

$3\frac{0}{3}$

$\frac{4}{10}$

$2\frac{2}{3}$

$\frac{6}{10}$

$1\frac{2}{4}$

$2\frac{0}{2}$

$\frac{9}{10}$

$\frac{2}{10}$

Answers

1)

1. _____

2)

2. _____

3)

3. _____

4)

4. _____

5)

5. _____

6)

6. _____

7)

7. _____

8)

8. _____

9)

9. _____

10)

10. _____